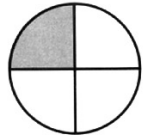


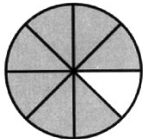
# FRACTIONS

Draw a line to match each shaded fraction to its correct answer.



1.  Example:

a)  $\frac{2}{3}$



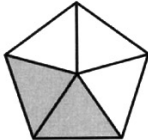
2.

b) one third



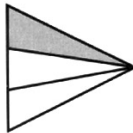
3.

c)  $\frac{3}{8}$



4.

d) three fifths



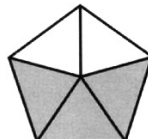
5.

e)  $\frac{3}{4}$




6.

f) two thirds



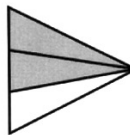
7.

g) one quarter




8.

h)  $\frac{5}{8}$



9.

i)  $\frac{3}{6} = \frac{1}{2}$



10.

j) one eighth



11.

k)  $\frac{7}{8}$



12.

l)  $\frac{2}{5}$



SCHOLASTIC